
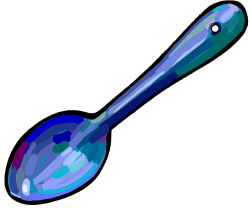







# Y2 Use of Everyday Materials

1. Name the **common materials** that the following items can be made from. (2 marks)

Tyre	Spoon	Goldfish bowl	Towel
			
Made from _____ _____	Made from _____ _____	Made from _____ _____	Made from _____ _____

2. Choose **two** words from the list below that can describe each of the following materials (you can use each word more than once). (2 marks)

**hard    soft    rigid    flexible    smooth    rough**

<p data-bbox="236 1308 363 1368">Logs</p>  <p data-bbox="145 1787 459 1800">_____</p> <p data-bbox="145 1868 459 1881">_____</p>	<p data-bbox="699 1308 900 1368">Sponge</p>  <p data-bbox="639 1787 954 1800">_____</p> <p data-bbox="639 1868 954 1881">_____</p>	<p data-bbox="1177 1308 1385 1368">Blanket</p>  <p data-bbox="1139 1787 1453 1800">_____</p> <p data-bbox="1139 1868 1453 1881">_____</p>
---	---	--

3. Look at the materials items below and tick the ones which are made from materials that can be **stretched** and **twisted**. (2 marks)

Pan


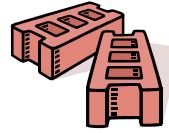
Jumper

Teddy

Brick

Socks

Fork









4. Write down **two** materials that the following items could be made from and **two** materials that they should not be made from. Explain why you would select these materials. (6 marks)

*Possible materials*

plastic metal wood cotton stone rubber glass

**Raincoat**



These materials could be used to make a raincoat \_\_\_\_\_

These materials should not be used to make a raincoat \_\_\_\_\_

Materials used to make a raincoat should be \_\_\_\_\_

**Chair**




These materials could be used to make a chair \_\_\_\_\_

These materials should not be used to make a chair \_\_\_\_\_

Materials used to make a chair should be \_\_\_\_\_

Y1 Scientific Knowledge and understanding assessment



12

Name: \_\_\_\_\_