

# Recognise coins

1 Write the correct value underneath each coin.

			
2p	5p	£2	10p
			
£1	20p	1p	50p

2 Complete the tables below by writing or drawing the correct coins.

a

Pence	Pounds
1p, 2p, 5p, 10p, 20p, 50p	£1, £2

b

Odd	Even
1p, 5p, £1	2p, 10p, 20p, 50p, £2


# Recognise coins




1 Write the amounts shown then match the equal amounts.




23p



15p




15p



23p




8p



26p



26p



8p

# Recognise coins



1 Write the amounts shown then match the equal amounts.




£3



£2 and 50p



£2 and 50p



72p



82p



£3



72p



82p

# Recognise coins



1 Write the amounts then draw coins to show the matched amount in a different way.



£3 and 50p

Any combination of coins that total 81p.


81p

Any combination of coins that total 67p.

67p



67p



81p

Any combination of coins that total £3 and 50p.

£3 and 50p

Any combination of coins that total £1 and 62p.

£1 and 62p



£1 and 62p