




















Time to the hour



Match the clocks to the correct time.

		<div>9 o'clock</div>	
		<div>12 o'clock</div>	
		<div>2 o'clock</div>	
		<div>4 o'clock</div>	
		<div>6 o'clock</div>	
		<div>10 o'clock</div>	

What time is shown on each of the clocks?

		
<div><u> 7 </u> o'clock</div>	<div><u> 1 </u> o'clock</div>	<div><u> 11 </u> o'clock</div>
		
<div><u> 3 </u> o'clock</div>	<div><u> 8 </u> o'clock</div>	<div><u> 5 </u> o'clock</div>


Time to the hour



Write the times shown on the clocks.



9 o'clock



6 o'clock



2 o'clock



10 o'clock




12 o'clock



4 o'clock



7 o'clock



1 o'clock



11 o'clock



3 o'clock



8 o'clock



5 o'clock


Time to the hour



Write the times shown on the clocks.



9 o'clock



6 o'clock



2 o'clock



10 o'clock



12 o'clock



4 o'clock



7 o'clock



1 o'clock



11 o'clock



3 o'clock



8 o'clock



5 o'clock

Draw the time

Draw the times on the clocks.



12 o'clock



3 o'clock



7 o'clock



6 o'clock



4 o'clock



1 o'clock



11 o'clock



8 o'clock



10 o'clock



5 o'clock



2 o'clock






9 o'clock

Challenge cards



Problem solving and reasoning cards:

Match the clocks to the correct time.



I am five hours after 3 o'clock.

I am three hours after 11 o'clock

I am the hour before 11 o'clock.


True or false?

- a) At 6 o'clock the hour hand and minute hand will point at the same number. False
- b) At 3 o'clock the hour hand will point at 12. False
- c) Two o'clock is an hour later than 3 o'clock. False
- d) Three hours before 12'clock is nine o'clock. True
- e) 12 noon and 12 midnight will look the same on the clock? True

List events that would take approximately:

More than an hour	Any appropriate answer.
Less than one hour.	Any appropriate answer.





What activities could be done at this time?

Answers including activities that could be done at 8 o'clock in the morning and 8 o'clock in the evening.

Colour the time that is six hours later.



4 o'clock

5 o'clock

6 o'clock

Match the times to the events.

Nine o'clock

3 o'clock

12 o'clock

10 o'clock

Break time

School register

Home time

Lunch time