



















# Number Shape Addition to 10 Missing Numbers

Use the number shapes to work out the missing number in each question.

	+		=	
	+		=	
	+		=	
	+		=	
	+		=	
	+		=	

# Number Shape Addition to 10 Missing Numbers

$$\begin{array}{|c|} \hline \text{3} \\ \hline \end{array} + \begin{array}{|c|} \hline \phantom{0} \\ \hline \end{array} = \begin{array}{|c|} \hline \text{3} \\ \hline \end{array}$$

$$\begin{array}{|c|} \hline \phantom{0} \\ \hline \end{array} + \begin{array}{|c|} \hline \text{3} \\ \hline \end{array} = \begin{array}{|c|} \hline \text{6} \\ \hline \end{array}$$

$$\begin{array}{|c|} \hline \text{3} \\ \hline \end{array} + \begin{array}{|c|} \hline \phantom{0} \\ \hline \end{array} = \begin{array}{|c|} \hline \text{3} \\ \hline \end{array}$$

$$\begin{array}{|c|} \hline \phantom{0} \\ \hline \end{array} + \begin{array}{|c|} \hline \text{1} \\ \hline \end{array} = \begin{array}{|c|} \hline \text{2} \\ \hline \end{array}$$

$$\begin{array}{|c|} \hline \text{2} \\ \hline \end{array} + \begin{array}{|c|} \hline \phantom{0} \\ \hline \end{array} = \begin{array}{|c|} \hline \text{3} \\ \hline \end{array}$$

$$\begin{array}{|c|} \hline \phantom{0} \\ \hline \end{array} + \begin{array}{|c|} \hline \text{2} \\ \hline \end{array} = \begin{array}{|c|} \hline \text{2} \\ \hline \end{array}$$