


Sammy the giraffe has 5 spots. Timmy the giraffe has 6 spots. How many spots are there in total?



There were 7 stars in space. An alien spaceship zapped 3 away! How many stars were left?



The happy penguin ate 4 fish. His friend ate 5 fish. How many fish did they eat in total?



Jim had 8 sweets. Lee gave him 4 more. How many sweets has Jim got now?



Liz had 11 slices of pizza. She ate 5 slices. How many does she have left now?



Tom had 13 cars. Jen gave him 4 more. How many cars has he got now?



Sam saw 15 rabbits in the field. 7 rabbits hopped away. How many are left in the field?



Jack had 17 magic beans. He accidentally dropped 4. How many does he have left?



Ben cycles 16 miles to school. Bob cycles 21 miles to school. How many miles less does Ben cycle?



Abi plays outside for 15 minutes. Joe plays outside for 22 minutes. How many minutes longer is Joe outside?



Zoe bakes 12 cookies for her friends. Pip eats 6. How many are left?



Ashley had 16 colouring pencils. Joe takes 7 to use. How many does Ashley have left?



Toby catches 9 mice. 4 of the mice escape. How many does Toby have now?



The yellow flower has 10 petals. The blue flower has 3 petals. How many less does the blue flower have?



The villain caught 14 people. The superhero rescued 8. How many does the villain still have?




Sammy the giraffe has 16 spots. Timmy the giraffe has 9 spots. How many spots are there in total?



There were 21 stars in space. An alien spaceship zapped 6 away! How many stars were left?



The happy penguin ate 19 fish. His friend ate 5 fish. How many fish did they eat in total?



Jim had 22 sweets. Lee gave him 8 more. How many sweets has Jim got now?



Liz had 19 slices of pizza. She ate 7 slices. How many does she have left now?



Tom had 16 cars. Jen gave him 8 more. How many cars has he got now?



Sam saw 11 rabbits in the field. 7 rabbits hopped away. How many are left in the field?



Jack had 17 magic beans. He accidentally dropped 8. How many does he have left?



Ben cycles 16 miles to school. Bob cycles 21 miles to school. How many miles less does Ben cycle?



Abi plays outside for 15 minutes. Joe plays outside for 22 minutes. How many minutes longer is Joe outside?



Zoe bakes 24 cookies for her friends. Pip eats 6. How many are left?



Ashley had 16 colouring pencils. Joe takes 7 to use. How many does Ashley have left?



Toby catches 13 mice. 7 of the mice escape. How many does Toby have now?



The yellow flower has 10 petals. The blue flower has 3 petals. How many less does the blue flower have?



The villain caught 14 people. The superhero rescued 8. How many does the villain still have?




Sammy the giraffe has 26 spots. Timmy the giraffe has 13 spots. How many spots are there in total?



There were 32 stars in space. An alien spaceship zapped 18 away! How many stars were left?



The happy penguin ate 21 fish. His friend ate 25 fish. How many fish did they eat in total?



Jim had 22 sweets. Lee gave him 16 more. How many sweets has Jim got now?



Liz had 19 slices of pizza. She ate 7 slices. How many does she have left now?



Tom had 26 cars. Jen gave him 9 more. How many cars has he got now?



Sam saw 24 rabbits in the field. 7 rabbits hopped away. How many are left in the field?



Jack had 17 magic beans. He accidentally dropped 8. How many does he have left?



Ben cycles 16 miles to school. Bob cycles 21 miles to school. How many miles less does Ben cycle?



Abi plays outside for 15 minutes. Joe plays outside for 22 minutes. How many minutes longer is Joe outside?



Zoe bakes 24 cookies for her friends. Pip eats 9. How many are left?



Ashley had 16 colouring pencils. Joe takes 6 to use. How many does Ashley have left?



Toby catches 13 mice. 7 of the mice escape. How many does Toby have now?



The yellow flower has 20 petals. The blue flower has 13 petals. How many less does the blue flower have?



The villain caught 14 people. The superhero rescued 8. How many does the villain still have?




Sammy the giraffe has 46 spots. Timmy the giraffe has 23 spots. How many spots are there in total?



There were 70 stars in space. An alien spaceship zapped 18 away! How many stars were left?



The happy penguin ate 31 fish. His friend ate 25 fish. How many fish did they eat in total?



Jim had 31 sweets. Lee gave him 16 more. How many sweets has Jim got now?



Liz had 19 slices of pizza. She ate 7 slices. How many does she have left now?



Tom had 26 cars. Jen gave him 12 more. How many cars has he got now?



Sam saw 44 rabbits in the field. 7 rabbits hopped away. How many are left in the field?



Jack had 27 magic beans. He accidentally dropped 8. How many does he have left?



Ben cycles 16 miles to school. Bob cycles 21 miles to school. How many miles less does Ben cycle?



Abi plays outside for 25 minutes. Joe plays outside for 12 minutes. How many minutes longer is Joe outside?



Zoe bakes 35 cookies for her friends. Pip eats 9. How many are left?



Ashley had 52 colouring pencils. Joe takes 13 to use. How many does Ashley have left?



Toby catches 21 mice. 6 of the mice escape. How many does Toby have now?



The yellow flower has 27 petals. The blue flower has 13 petals. How many less does the blue flower have?



The villain caught 24 people. The superhero rescued 16. How many does the villain still have?

