

Name \_\_\_\_\_

1 Circle the letters that have right angles.

T H E N



2 marks

2 Match the objects to the most appropriate units of measure.

Length of an ant \_\_\_\_\_ cm

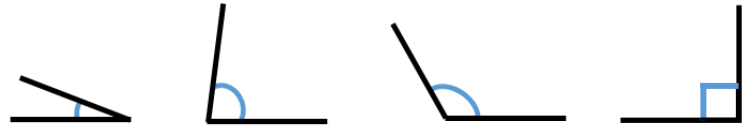
Length of a school hall \_\_\_\_\_ mm

Length of a pencil \_\_\_\_\_ m



2 marks

3 Circle the angles that are less than a right angle.



1 mark

4 This ladybird is rotated.



Choose the correct word to complete each sentence.

quarter    half    three-quarter    full

The ladybird has made a \_\_\_\_\_ turn clockwise.

The ladybird has made a \_\_\_\_\_ turn anti-clockwise.



2 marks

5 Measure the crayon to the nearest cm.



\_\_\_\_\_ cm

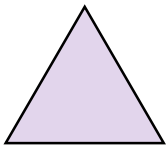
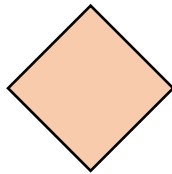
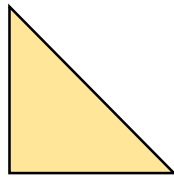
1 mark

6 Draw a line that is 4 cm and 3 mm long.

1 mark


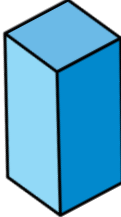
7 Here are some 2-D shapes.

Circle the shapes that have parallel lines.




2 marks

8 Complete the table.

Shape	Faces	Edges	Vertices
 Triangular prism	5		
 Cuboid		12	

4 marks

Circle how confident you feel with properties of shape.

1                      2                      3                      4                      5  
 Not                      Very  
 confident                      confident