


Name _____

1 Here is a clock.



Use the words to complete the sentences.

minute

hour

day

time

The shortest hand is the _____ hand.

The longest hand is the _____ hand.

2 marks

2 Complete.


There are _____ minutes in an hour.

There are _____ minutes in a quarter of an hour.

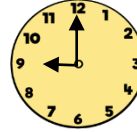
There are _____ minutes in half an hour.

3 marks


3 Match the clocks to the correct times.




9 o'clock



5 past 6



Half past 1



Quarter to 12

3 marks

4 Order the times from shortest to longest.

1 hour
10 minutes

Three
quarters of
an hour

55 minutes

A

B

C

Shortest

Longest

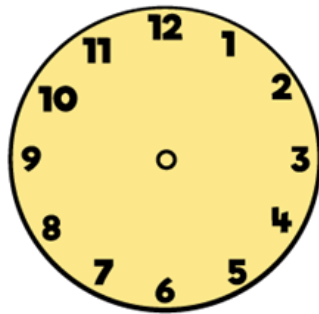
1 mark

- 5 Aisha leaves her house at sixteen minutes past 4
She walks 10 minutes to the bus stop.
What time does she arrive at the bus stop?
Write your answer in words.

Henry is walking from his house to school.

- The walk is 18 minutes long.
- He arrives at 8 minutes past 8

What time does he leave the house?
Draw the time on the clock.



1 mark

1 mark

- 6 Circle am or pm for each statement.



It is five o'clock in the afternoon.

am

pm

I am eating my breakfast before school.



am

pm

2 marks

- 7 There are 24 hours in a day.
How many hours are in 3 days?

_____ hours

How many days is 120 hours?

_____ days

2 marks

Circle how confident you feel with time.

1 2 3 4 5
Not Very
confident confident